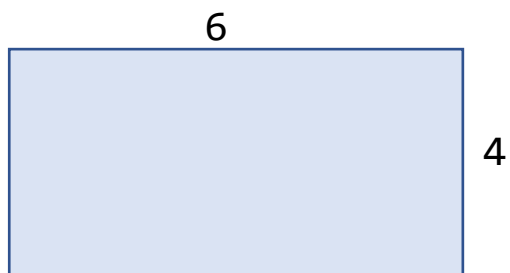


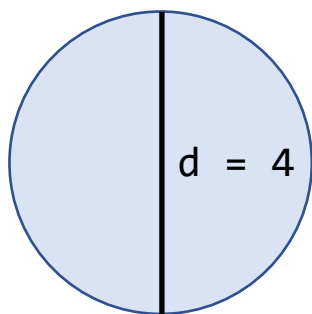
Brug din formelsamling - Geometri

Find A og O



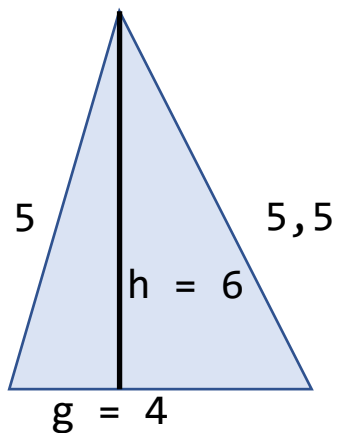
A = _____

O = _____



A = _____


O = _____



A = _____

O = _____

Find O omkreds
Find A areal

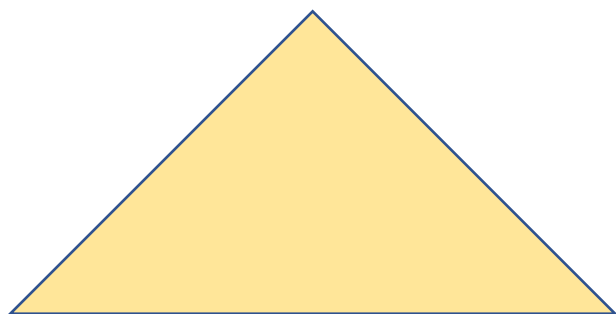


A = _____

O = _____


A = _____

O = _____



A = _____

O = _____




$h =$ _____ (mål)

$g =$ _____ (mål)

$A =$ _____

$O =$ _____



$h =$ _____ (mål)

$g =$ _____ (mål)

$A =$ _____

$O =$ _____



$h =$ _____ (mål)

$g =$ _____ (mål)

$A =$ _____

$O =$ _____